











Year 2 Homework Grid - Summer 1 2024

Please complete all homework in the orange boxes, then a selection from the green. One class dojo will be awarded for each completed box.

| Week beginning: 22.04.2024 | Week beginning: 29.04.2024 | Week beginning: 06.05.2024 | Week beginning: 13.05.2024 | Week beginning: 20.05.2024 |
|--|--|---|---|---|
| Read daily | Read daily | Read daily | Read daily | Read daily |
| Spelling Frame practise | Spelling Frame practise | Spelling Frame practise | Spelling Frame practise | Spelling Frame practise |
| TTRockstars practise | TTRockstars practise | TTRockstars practise | TTRockstars practise | TTRockstars practise |
| Be a sentence doctor and correct the following sentence adding 3 missing full stops. I love to ride my bike I use it to get to school It helps keep me fit | Circle the correct word to complete the sentence below I thought I had forgotten my reading book ___ I found it in my tray. or but so and | Tick two adjectives that can be changed into adverbs by adding ly on the end <input type="checkbox"/> quiet <input type="checkbox"/> blue <input type="checkbox"/> little <input type="checkbox"/> bad <input type="checkbox"/> tall | Which word completes the sentence below correctly? The cheetah is the ____ animal in the world. <input type="checkbox"/> faster <input type="checkbox"/> fast <input type="checkbox"/> fastness <input type="checkbox"/> fastest | Be a sentence doctor and correct these sentences I went to the shop and I buy some grapes and bananas. I went to the park and I play football with my sister. |
| Find as many halves as you can and make a list or take photos. <i>(½ way to school, ½ way across the room. ½ a box of eggs, ½ an hour, ½ the wheels on a car, ½ a kilo of sugar).</i> How many halves can you find?  | Can you find ½ and ¼? Find 4 teddies or toys for a teddy bear picnic! You need some items for the teddies to share. (For example 20 grapes, 12 raisins, 4 plates, 1 chocolate bar, 4 glasses, 1 bottle of water, 1 pizza.) The teddies want to share everything equally .  | Starting in a lying position, can you throw a bouncing ball , chase and collect it?  | Play a game of 2, 5 and 10 times tables snakes and ladders . GAME  | Can you use a clock from home to practise finding the important times in your daily routine. (breakfast, heading to school, lunch, clubs, dinnertime, bedtime...)  |
| Find Jamaica using google maps Can you research 3 interesting facts about Jamaica?  | Describe the physical properties of everyday materials from your home. Example: Keywords: translucent, squashy, flexible, smooth, rough, shiny, waterproof, transparent, metallic, dull, bumpy, opaque, rigid, absorbent, hard or soft  | Explore Chrome Music Lab at home. What digital music will you make? https://musiclab  | Watch the story of Ben and the 'invisibility ring' why-should-i-be-good? Discuss what the right thing to do would be with the ring.  | Be inspired! Can you use your imagination to invent a new musical instrument?  |

Year 2 Homework Grid - Summer 1 2024